



Name: _____

Section: _____

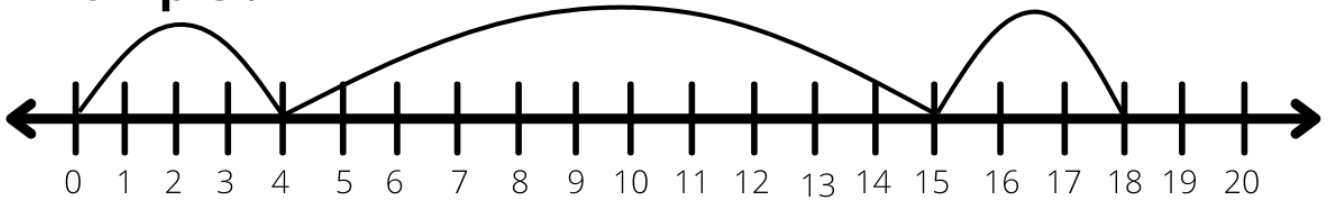
Date: _____

Teacher: _____

ADDING WITH NUMBER LINES

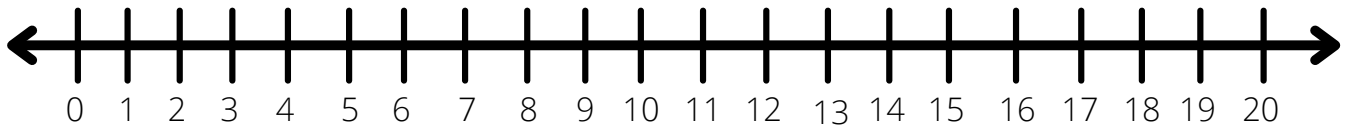
Solve the following by drawing hops on the number line.

Example :



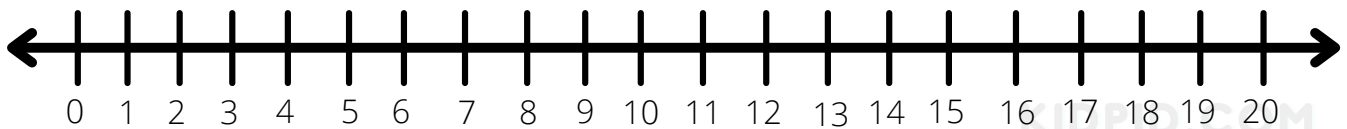
$$4 + 11 + 3 = \boxed{18}$$

1.



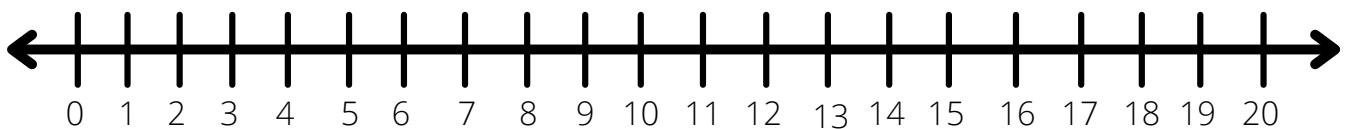
$$6 + 10 + 2 = \square$$

2.



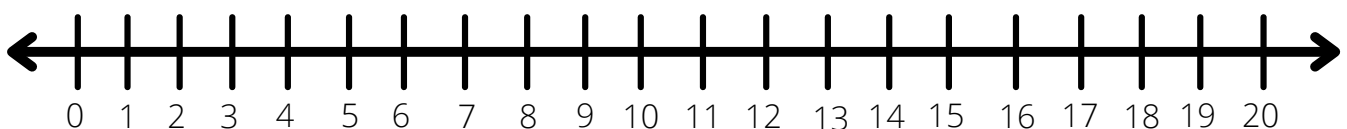
$$3 + 5 + 8 = \square$$

3.



$$9 + 6 + 5 = \square$$

4.



$$11 + 5 + 2 = \square$$



Name:

Section:

Date:

Teacher:

ADDING WITH NUMBER LINES

Solve the following by drawing hops on the number line.

Example :

$4 + 11 + 3 = 18$

1.

$3 + 7 + 9 = \square$

2.

$12 + 3 + 1 = \square$

3.

$6 + 5 + 6 = \square$

4.

$7 + 5 + 6 = \square$



Name:

Section:

Date:

Teacher:

ADDING WITH NUMBER LINES

Solve the following by drawing hops on the number line.

Example :

$4 + 11 + 3 = 18$

1.

$5 + 8 + 3 = \square$

2.

$6 + 11 + 2 = \square$

3.

$16 + 3 + 1 = \square$

4.

$11 + 5 + 2 = \square$