



Name:

Section:


Date:



Teacher:

TALLY CHARTS



Ramya has some fruits in her basket. Using Tally Charts given below, Find how many fruits does she have in her basket.



1.		
2.		

1. Which fruit did she have more.

- Apple
 Strawberry

2. Which fruit did she have lesser.

- Apple
 Strawberry

3. How many apples are there in the basket.

- 8 9 10

4. How many strawberries are there in the basket.

- 8 9 10

5. What is the total number of fruits in the basket. Write a number sentence.



Name: _____

Section: _____


Date: _____



Teacher: _____

TALLY CHARTS



Ragu bought some vegetables in the market. Using Tally Charts given below, Find how many vegetables does he bought in the market.



1.		
2.		

1. Which vegetable did he bought more.

Carrot

Cucumber

2. Which vegetable did he bought lesser.

Carrot

Cucumber

3. How many carrots did he bought in the market.

11

12

13

4. How many cucumbers did he bought in the market.

14

15

16

5. What is the total number of vegetables did he bought in the market. Write a number sentence.



Name:

Section:


Date:



Teacher:

TALLY CHARTS



Mano went to the aquarium. He saw some fishes and sea turtles. Using Tally Charts given below, Find how many fishes and turtles does he saw in the aquarium.



1.		
2.		

1. Which sea animal did he saw more.

- Fish
 Turtle

2. Which sea animal did he saw lesser.

- Turtle
 Fish

3. How many fishes are there in the aquarium.

- 8 9 10

4. How many turtles are there in the aquarium.

- 6 7 8

5. What is the total number of sea animals in the aquarium.

Write a number sentence.



Name: _____

Section: _____


Date: _____



Teacher: _____

TALLY CHARTS



Marry saw a insects like butterfly, earthworm in her garden. Using Tally Charts given below, Find how many fruits does she have in her basket.



1. 	
2. 	

1. Which insect did she saw more.

- Butterfly
 Earthworm

2. Which insect did she saw lesser.

- Earthworm
 Butterfly

3. How many butterflies are there in the garden.

- 9 10 11

4. How many earthworms are there in the garden.

- 5 6 7

5. What is the total number of insects in the garden. Write a number sentence.



Name: _____

Section: _____

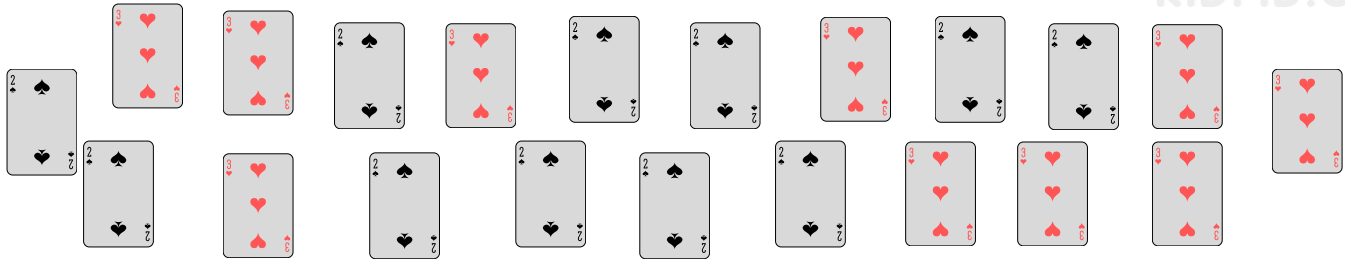
Date: _____



Teacher: _____

TALLY CHARTS



Sheela loves to play cards. In a game she have two different symbol cards in her hand. Using Tally Charts given below, Find how many cards does she have in her hand.



1. 	
2. 	

- Which card did she have more in her hand.
 - Red colour card
 - Black colour card
- Which card did she have lesser in her hand.
 - Red colour card
 - Black colour card
- How many red colour cards are there in her hand.
 - 10 11 12
- How many black colour cards are there in her hand.
 - 10 11 12
- What is the total number of cards in her hand. Write a number sentence.